

Shapes Picture Worksheet

Name: _____


Date: _____

Answer the question: How many sides does a square have? → **A square has four sides.**


1.




2.




3.




4.



5.




6.




7.



8.



9.



Rectangle

Square

Oval

Circle

Cross

Hexagon

Octagon

Triangle

Diamond

Copyright © 2010 www.kidseslgames.com



Kids ESL Games

ESL Games For Kids & Young Learners

